


			2
	1 01 1 02		

	1. 2. . . . .	
	P19	



$$- \frac{1}{\underbrace{\quad \dots \quad}}(0)$$

 $\sqrt{\quad}$  $\sqrt{\quad}$



	P19	

$$\sqrt{\quad + \quad}$$

$$a^a = a^{a^+} \quad a \neq$$
$$(a^a) = a^a \quad a \neq$$

$$(ab)^a = a^b \quad a \neq b \neq$$

$$a \div a = a^{-1} \quad a \neq$$

$$\left(\frac{a}{b}\right) = \frac{a}{b} \quad a \neq \quad b \neq$$

$$a = a \quad a \neq$$

$$a^{-1} = \frac{1}{a} \quad a \neq 0$$

$$(a+b+c) = a + b + c$$

$$(a+b)(a-b) = a^2 - b^2$$

$$(a \pm b)^2 = a^2 \pm 2ab + b^2$$

$$(a \pm b)(a \mp ab + b) = a^3 \pm b^3$$

$$|a - | + (b - ) =$$

$$a - a + =$$

$$a + b + c = (a+b+c)$$

$$a^2 - b^2 = (a+b)(a-b)$$

$$a^2 \pm 2ab + b^2 = (a \pm b)^2$$

$$a^3 \pm b^3 = (a \pm b)(a^2 \mp ab + b^2)$$

$$+(a+b) + ab = ( + a)( + b)$$



$$\frac{A}{B}$$

$$\frac{A}{B} = \frac{A \times M}{B \times M} \quad \frac{A}{B} = \frac{A \div M}{B \div M}$$

$$\frac{a}{c} \pm \frac{b}{c} = \frac{a \pm b}{c}$$

$$\frac{a}{b} \pm \frac{c}{d} = \frac{ad \pm bc}{bd}$$

$$\frac{a}{b} \cdot \frac{c}{d} = \frac{ac}{bd}$$

$$\frac{a}{b} \div \frac{c}{d} = \frac{a}{b} \cdot \frac{d}{c} = \frac{ad}{bc}$$

$$\left(\frac{a}{b}\right)^n = \frac{a^n}{b^n}$$

$$\sqrt{a} \quad a \geq 0$$

$$\sqrt{a} \quad a \geq 0$$

$$(\sqrt{a})^2 = a \quad (a \geq 0)$$

$$\sqrt{a} = |a| = \begin{cases} a & a \geq 0 \\ -a & a < 0 \end{cases}$$

$$\sqrt{ab} = \sqrt{a} \sqrt{b} \quad (a \geq 0, b \geq 0)$$

$$\sqrt{\frac{a}{b}} = \frac{\sqrt{a}}{\sqrt{b}} \quad (a \geq 0, b > 0)$$

$$\sqrt{(-a)^2} = |-a| = -a$$

$$\sqrt{(-a)^2} = |-a| = -a \geq -a \leq \sqrt{(-a)^2}$$

$$\sqrt{a^2} = |a| = \begin{cases} a & (a \geq 0) \\ -a & (a < 0) \end{cases}$$

$$\sqrt{a+b} \sqrt{a+b}$$

$$a + \sqrt{b} \quad a - \sqrt{b}$$

$$\sqrt{a} + \sqrt{b} \quad \sqrt{a} - \sqrt{b}$$


	P28	

<p>1 <math>ax+b=0</math> <math>a \neq 0</math></p> <p>1 <math>0</math></p> <p>2 <math>1</math> <math>2</math> <math>3</math> <math>4</math></p> <p>1 5</p> <p>5 <math>x-1 = 3</math> <math>2-3x</math> <math>-2</math> <math>x+5</math></p> <p>50 <math>2x-3 = 80-15x</math></p>	
<p>1. <math>ax^2+bx+c=0</math> (<math>a \neq 0</math>)</p> <p>2 <math>3</math> <math>4</math></p> <p><math>x = \frac{-b \pm \sqrt{b^2 - 4ac}}{2a}</math></p> <p>2</p> <p>3. <math>ax^2+bx+c=0</math> (<math>a \neq 0</math>) <math>\Delta = b^2 - 4ac</math></p> <p><math>\Delta &gt; 0</math> <math>x_1 = \frac{-b + \sqrt{\Delta}}{2a}</math>, <math>x_2 = \frac{-b - \sqrt{\Delta}}{2a}</math></p> <p><math>\Delta = 0</math> <math>x_1 = x_2 = -\frac{b}{2a}</math> <math>\Delta &lt; 0</math></p> <p>4. <math>ax^2+bx+c=0</math> (<math>a \neq 0</math>) <math>x_1, x_2</math></p>	
<p><math>x_1 + x_2 = -\frac{b}{a}</math>, <math>x_1 x_2 = \frac{c}{a}</math></p> <p><math>x^2 - (x_1 + x_2)x + x_1 x_2 = 0</math></p> <p>1 <math>x^2 - x - 2 = 0</math> (P27)</p> <p>2 <math>x^2 + 4x - 5 = 0</math> (P27)</p>	

1				
2		0		
3				
1.				
2.				
	(a<b)			
		x b		
		x a		
		a x b		

<p>1. " x a" " x a"</p> <p>x 5 1; 2 2x 3;</p> <p>1 1 5 x</p> <p>1+5 x 4;</p> <p>2 3 2 x</p> <p>2 3;</p> <p>2</p> <p><math>3(x+1) &gt; 4x+2, \quad x &lt; 1</math></p> <p>x -2</p> <p>-2 x &lt; 1</p> <p>-2 -1 0</p> <p>P33 36</p>	









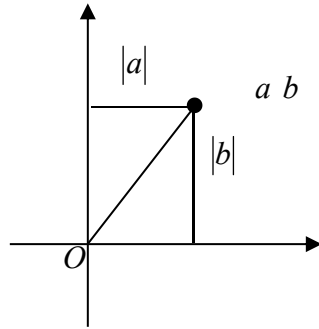
5.

$P \ a \ b$

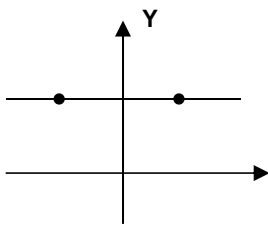
$|b|$

$b|a|$

$\sqrt{a \ b}$



6.



7.

$P$

$P$

$P$

8.

	1	$y=kx+b \quad k \neq 0$	$y=kx \quad k \neq 0$
	2		
	3		
			2
	1901	1902	<b>ppt</b>

?

?

- 1.
- 2.
- 3.
- 4.



		$y=kx+b$			
$y=kx+b$	(2)	$y=kx+b$	$y=kx$	(3)	
$y=kx+b$		$y=kx$	$ b $	.	
1.			$y=2x+3$	$y=-0.5x-2$	
2			$y=2x$	$y=-0.5x$	2
		$y=2x-1$	$y=-0.5x+1$		
$y=kx$	$k$			$y=kx+b$	$k$
	$k>0$		$y$	$x$	
	$k<0$		$y$	$x$	
$y=kx+b$					
$k>0$	$b>0$				
	$b<0$				
$k<0$	$b>0$				
	$b<0$				



<p>1 2</p> $y=2x$ <hr/> $y=-2x$ <hr/>	<hr/> <p>2</p> <p>3</p>
<p>1 2</p> $y=2x-3$ $y=2x-3$ <hr/> <p>x</p> $y=kx+b$ <hr/>	<p>(1,a)</p> <p>a=_____</p> <hr/> <p>y</p> <hr/> <p>k b</p>
<p>4</p> $y=kx+k$ <hr/> <p>k 0</p> <hr/>	

			<b>ppt</b>

	P5 7	

	= -	≠				
	= -	= - $\frac{\sqrt{\quad}}{\quad}$			= $\frac{\quad}{+}$	
= - - -						
	= - +					
= -				= $\frac{+}{\quad}$		
= -	= $\frac{+}{\quad}$	= -	= $\frac{\quad}{+}$	= -	= - -	=
		≠				
				≠		
				≠		

$$\left\{ \begin{array}{l} = - ( \neq ) \\ = ( \neq ) \\ = - \bullet ( \neq ) \end{array} \right.$$

$$= - ( \neq )$$

$$= - \bullet ( \neq )$$

$$= -$$

$$- = -$$

$$=$$

$$= -$$

$$= -$$

$$= -$$

$$= -$$

$$= - =$$

$$= -$$

---





		$\underline{\quad} = (\underline{\quad} \neq)$	$\underline{\quad} = -(\underline{\quad} \neq)$
		$\underline{\quad}$ $\underline{\quad}$	$\underline{\quad}$ $\underline{\quad}$
		$\underline{\quad}$ $\underline{\quad}$	$\underline{\quad}$ $\underline{\quad}$
		$\underline{\quad}$ $\underline{\quad}$	$\underline{\quad}$ $\underline{\quad}$
		$\underline{\quad}$ $\underline{\quad}$	$\underline{\quad}$ $\underline{\quad}$



	1	a	b c
	2		
	3		
			2
	1901	1902	<b>ppt</b>

	<ol style="list-style-type: none"><li>1.</li><li>2.</li><li>3.</li></ol>	
	P63	

1.  $y = ax^2 + bx + c$  ( $a, b, c$   $a \neq 0$ )

$y$   $x$  .

2. .

3.

$y = ax^2$

a

$$a > 0$$

$$a < 0$$

$$2 \quad b \quad a$$

$$b = 0$$

$$y \quad a \quad b$$

$$y \quad a \quad b$$

$$y$$

$$3 \quad c$$

$$y$$

$$c = 0$$

$$c > 0 \quad , \quad y$$

$$c < 0 \quad , \quad y$$

6.

1

$$y = ax^2 + bx + c = a\left(x + \frac{b}{2a}\right)^2 + \frac{4ac - b^2}{4a}$$

$$-\frac{b}{2a} \quad \frac{4ac - b^2}{4a}$$

$$x = -\frac{b}{2a}$$

2

$$y = ax^2 + bx + c$$

$$y = a(x - h)^2 + k$$

$$(h, k)$$

$$x = h$$

$$h = -\frac{b}{2a} \quad k = \frac{4ac - b^2}{4a}$$

3

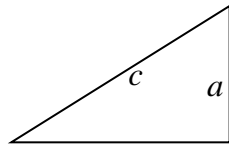
...

7

1	$y = ax^2 + bx + c$	$x \quad y$
2	$y = a(x-h)^2 + k$	
3	$x$	$x_1 \quad x_2$
	$y = a(x-x_1)(x-x_2)$	
8.	$x$	
	$y = ax^2 + bx + c$	$x$
$x_1 \quad x_2$		$ax^2 + bx + c = 0$
	$x$	
1	$b^2 - 4ac > 0 \Leftrightarrow$	$x$
2	$b^2 - 4ac = 0 \Leftrightarrow$	$x \quad x$
3	$b^2 - 4ac < 0 \Leftrightarrow$	$x$
1	$y = mx^2 + x - 2$	$m$
2	$y = 5x^2 + 10mx + n$	$2$
3		$y = 5x^2 + 30x + 44$
	$m = \underline{\hspace{2cm}}$	$n = \underline{\hspace{2cm}}$
3	$x$	$A(-2,0) \quad B \quad 1 \quad 0$
C	$2 \quad 8$	
	$1$	$2$







$A = \frac{\angle A}{\angle A}$	$A = \frac{a}{c}$	$< A <$	$A =$ $A =$ $A +$
$A = \frac{\angle A}{\angle A}$	$A = \frac{b}{c}$	$< A <$	
$A = \frac{\angle A}{\angle A}$	$A = \frac{a}{b}$	$A >$	$A =$ $A =$ $A = \frac{\quad}{A}$ $A \cdot A$
$A = \frac{\angle A}{\angle A}$	$A = \frac{b}{a}$	$A >$	



$\alpha$		-	$\sqrt{\quad}$	$\sqrt{\quad}$	
$\alpha$		$\sqrt{\quad}$	$\sqrt{\quad}$	-	
$\alpha$		$\sqrt{\quad}$		$\sqrt{\quad}$	
$\alpha$		$\sqrt{\quad}$		$\sqrt{\quad}$	

$A =$	$B$
$A$	$B$

$A =$	$\circ - A$
$A =$	$\circ - A$

$\alpha$

$\alpha$

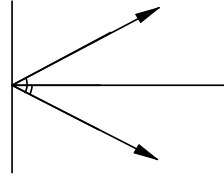
$\alpha$

$\alpha$

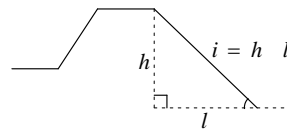
$A = \sqrt{\quad} \quad \frac{A}{\quad} =$

$\sqrt{\quad}$	
$\sqrt{\quad}$ $\circ_{-}$ $\circ_{.}$ $\circ$	$\frac{\circ_{+} \quad \circ}{\circ_{\times} \quad \circ}$

$$\frac{A}{\quad} \quad \frac{B+C}{\quad} \quad \frac{A}{B}$$



$$i = \frac{h}{l}$$



$$m \quad i =$$

$\alpha$

$$i = \frac{h}{l} = \alpha$$



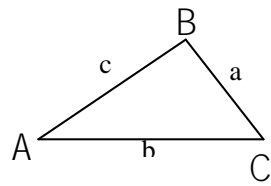
	1		
	2		
			2
	1901	1902	

- 1.
- 2.

.

P114

[ 1-6]



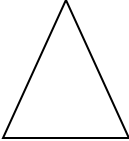
C                    ABC                    ABC                    ABC  
                   AB                    c                    ,                    B                    AC                    b                    ,  
                   A                    BC                    a                    .

                  [                    7]                    ABC,  
                   B                    ,                    C,                    ?

                  1                    B                    C                    2                    B                    A                    C

AB+AC                    BC  
                   AC+BC                    AB  
                   AB+BC                    AC



<p> <math>\{</math> </p> <p> <math>:</math> </p> <p> <math>\{</math> </p> <p> <math>"</math> </p> <p> <math>"</math> </p> <p>  </p> <p> <math>:</math> </p> <p> <math>\{</math> </p> <p> <math>\{</math> </p> <p> <math>18</math> </p> <p> <math>2</math> </p> <p> <math>4</math> </p> <p> <math>1</math> </p> <p> <math>1</math> </p> <p> <math>2</math> </p> <p> <math>2</math> </p> <p> <math>1</math> </p> <p> <math>2</math> </p> <p> <math>4</math> </p> <p> <math>2</math> </p> <p> <math>1</math> </p> <p> <math>x</math> </p> <p> <math>x+2x+2x=18</math> </p> <p> <math>x=3.6</math> </p> <p> <math>3.6</math> </p> <p> <math>7.2</math> </p> <p> <math>7.2</math> </p> <p> <math>.</math> </p> <p> <math>x</math> </p>	<p> <math>1</math> </p> <p> <math>2</math> </p> <p> <math>x</math> </p>
<p> <math>2</math> </p> <p> <math>4</math> </p>	<p> <math>x</math> </p>

$$4+2x=18$$

$$x=7$$

$$4$$

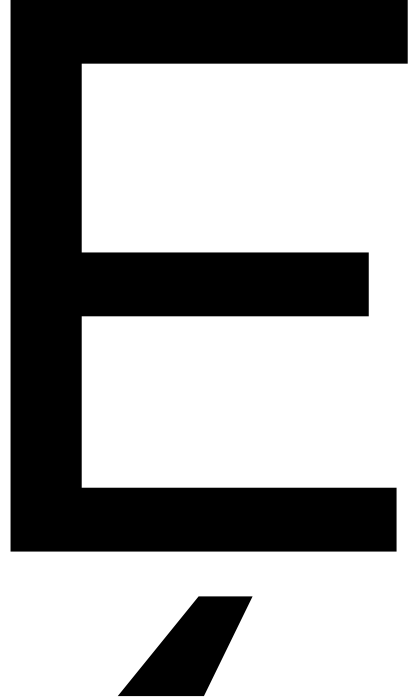
$$2 \times 4+x=18$$

$$x=10$$

$$4+4 \quad 10$$

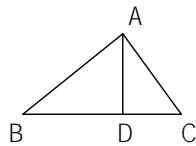
$$4$$

x



4

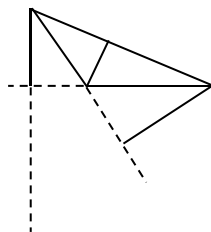
ABC



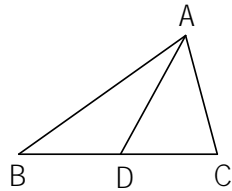
ABC      A      BC  
D      AD      ABC      BC  
AD BC      D

AB    AC

ABC

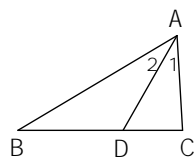


$BD=DC$      $AD$      $ABC$      $A$      $BC$   
 $BD=DC$      $BD=DC$      $1/2BC$      $2BD=2DC=BC.$



$ABC$

$BAD=$      $A$      $AD$      $A$      $BC$      $D$   
 $CAD$      $ABC$      $,$      $BAD=$      $CAD$   
 $1/2$      $BAC$      $2$      $BAD=2$      $CAD$   
 $BAC$



1	
2	2
3	

1	
A	
B	
C	
D	

			<b>ppt</b>

	P100	










$$\frac{\pi R}{\pi R} = \frac{\pi R}{\pi R}$$

$$\frac{\pi R}{\pi R} = \frac{n\pi R}{n\pi R}$$

$$\frac{n\pi R}{n\pi R}$$

$\frac{n\pi R}{n}$	





**D**

**b**

**o**






		4	4.1.6
		1	
		2019.11.25	1902

	<p>1</p> <p><math>\frac{2}{\alpha} = 2</math></p> <p><math> \alpha  = -</math></p> <p>2</p> <p><math>\frac{2}{\alpha}(\ ) = 2(\ )</math></p> <p>360 2 180</p>	<p>1</p> <p>2</p>	

	$1 \frac{1}{180} ( ) \approx 0.01745$ $1 = \frac{180^\circ}{\pi} \approx 57.30^\circ \approx 57^\circ 18'$		
	<p>240                      22 30</p> $1 \frac{1}{180} ( ) \approx 0.01745$ $240^\circ = \frac{\pi}{180} \times 240 = \frac{4}{3} \pi$ $(2) 22^\circ 30' = 22.5^\circ = \frac{\pi}{180} \times 22.5 = \frac{\pi}{8}$ <p><math>\frac{3}{5}</math>                      2.1</p> $1 = \left(\frac{180}{\pi}\right)^\circ \approx 57.3^\circ \approx 57^\circ 18'$ $\frac{3\pi}{5} = \frac{3 \times 180^\circ}{5} = 108^\circ$ $2.1 = \frac{180^\circ}{\pi} \times 2.1 = \frac{378^\circ}{\pi} \approx 120.32^\circ$		
1.		PPT	
2.			

		0 1	
	60	$\frac{3}{3}$	
		$= \alpha  = \frac{3}{3} \times 45 \approx 3.142 \times 15 \approx 47.1$	
		47.1	